



Use the number line to solve each problem.

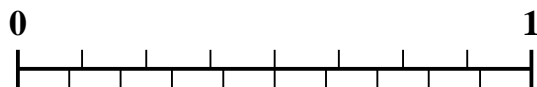
1) Which amount is larger, $\frac{5}{7}$ or 0.6?



2) Which amount is larger, $\frac{3}{7}$ or 0.24?




3) Which amount is larger, $\frac{4}{8}$ or 0.4?



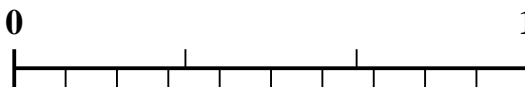
4) Which amount is larger, $\frac{1}{4}$ or 0.4?



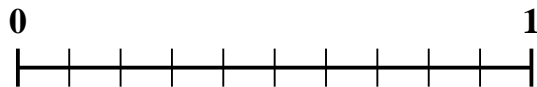
5) Which amount is larger, $\frac{5}{10}$ or 0.64?



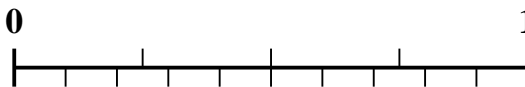
6) Which amount is larger, $\frac{2}{3}$ or 0.79?



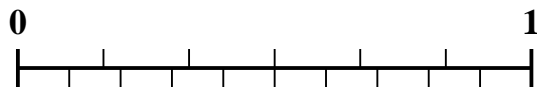
7) Which amount is larger, $\frac{6}{10}$ or 0.42?



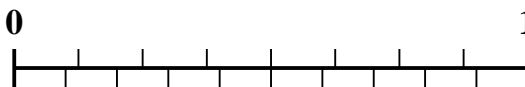
8) Which amount is larger, $\frac{3}{4}$ or 0.9?



9) Which amount is larger, $\frac{4}{6}$ or 0.57?



10) Which amount is larger, $\frac{2}{8}$ or 0.39?



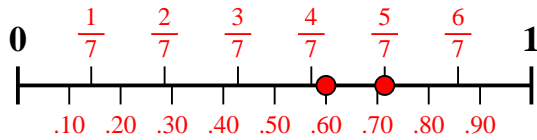
Answers

1. _____
2. _____
3. _____
4. _____
5. _____
6. _____
7. _____
8. _____
9. _____
10. _____

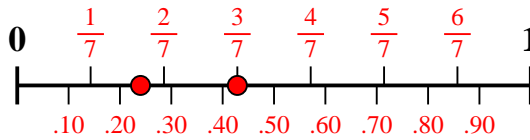


Use the number line to solve each problem.

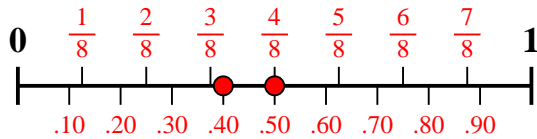
1) Which amount is larger, $\frac{5}{7}$ or 0.6?



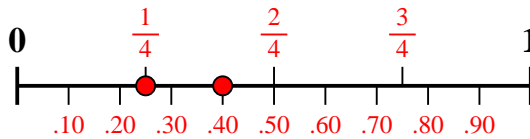
2) Which amount is larger, $\frac{3}{7}$ or 0.24?



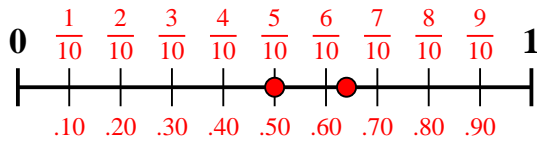
3) Which amount is larger, $\frac{4}{8}$ or 0.4?



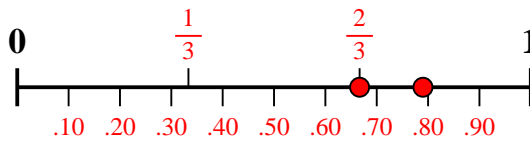
4) Which amount is larger, $\frac{1}{4}$ or 0.4?



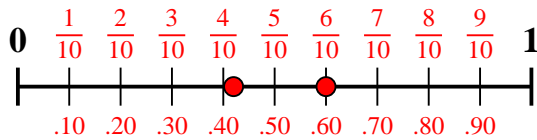
5) Which amount is larger, $\frac{5}{10}$ or 0.64?



6) Which amount is larger, $\frac{2}{3}$ or 0.79?



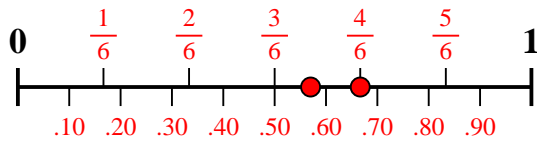
7) Which amount is larger, $\frac{6}{10}$ or 0.42?



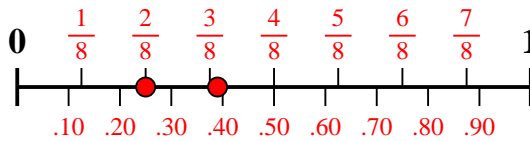
8) Which amount is larger, $\frac{3}{4}$ or 0.9?



9) Which amount is larger, $\frac{4}{6}$ or 0.57?



10) Which amount is larger, $\frac{2}{8}$ or 0.39?



Answers

1. $\frac{5}{7}$
2. $\frac{3}{7}$
3. $\frac{4}{8}$
4. **0.4**
5. **0.64**
6. **0.79**
7. $\frac{6}{10}$
8. **0.9**
9. $\frac{4}{6}$
10. **0.39**